

# Greater Than Less Than

Name: \_\_\_\_\_

Date: \_\_\_\_\_

Write  $<$ ,  $>$  or  $=$

1.  $86 \underline{\quad} 16$

4.  $6 \underline{\quad} 6$

7.  $52 \underline{\quad} 78$

2.  $92 \underline{\quad} 71$

5.  $632 \underline{\quad} 632$









8.  $7 \underline{\quad} 9$

3.  $76 \underline{\quad} 74$

6.  $716 \underline{\quad} 716$

9.  $43 \underline{\quad} 63$

Add or Subtract



How many centimeters long is it?



The pencil is \_\_\_\_\_ cm long.

Color the even numbers green and the odd numbers yellow.

43

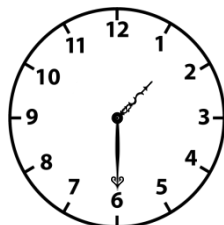
288

711

133

64

239

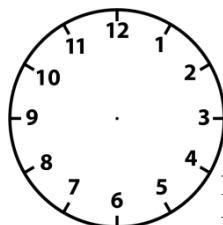


What time is it?

It's \_\_\_\_\_:30.

It's \_\_\_\_\_

It's \_\_\_\_\_

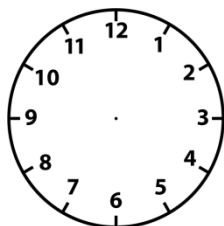


What time is it?

It's 3:30.

It's \_\_\_\_\_

It's half past \_\_\_\_\_

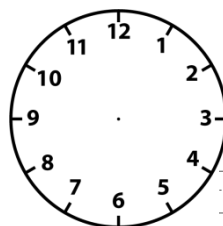


What time is it?

It's \_\_\_\_\_:30.

It's \_\_\_\_\_ - thirty.

It's half past ten.



What time is it?

It's 7:30.

It's \_\_\_\_\_ - thirty.

\_\_\_\_\_